





Christmas dinner



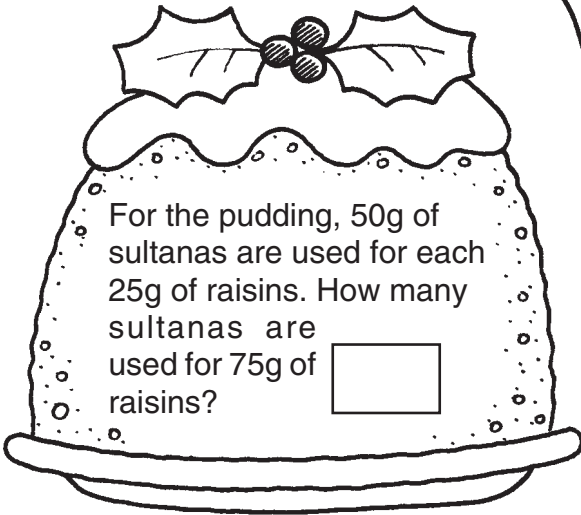
Help busy Mrs. Santa to get the Christmas dinner prepared.

The turkey must be cooked for 20 minutes for each 500g. It weighs 3.25kg. How long must it cook for?




Mrs Santa adds $\frac{1}{2}$ a tablespoon of granules for each litre of stock. What quantity of granules does she use for $2\frac{1}{2}$ litres of gravy?


For the pudding, 50g of sultanas are used for each 25g of raisins. How many sultanas are used for 75g of raisins?



For each big cake she makes, she bakes eight muffins. How many big cakes does she make if she cooks 32 muffins?



Each trifle takes $\frac{1}{2}$ teaspoon of hundreds and thousands. If Mrs Santa uses $3\frac{1}{2}$ teaspoons of hundreds and thousands, how many trifles has she made?



Six elves eat a quarter of the roast potatoes, which is 2 each. How many roast potatoes are there altogether?

