





Sequence of Events

A Day in the Life of a Bee

1. Number the bee stages from 1 to 4 to show the correct order.

Prediction

A Day in the Life of a Bee

1. What will the bee do when it stops raining?

2. If you were a bee, would you rather be a queen bee, a worker bee or a drone bee?

Explain your choice.

I would like to be a _____ bee because
