


Cakes



Ram wants to know how many cakes are left.



He notices there are four cakes and three cakes.

$$4 + 3 = 7$$

How many cakes are on these plates? Write the sums.



Colour the star if you can
pick up a handful of cubes
and know quickly how
many cubes there are.

