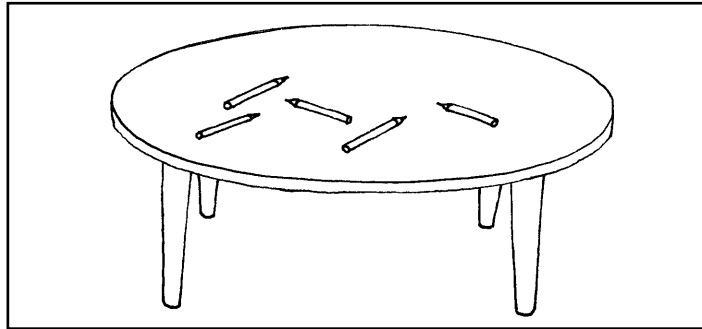
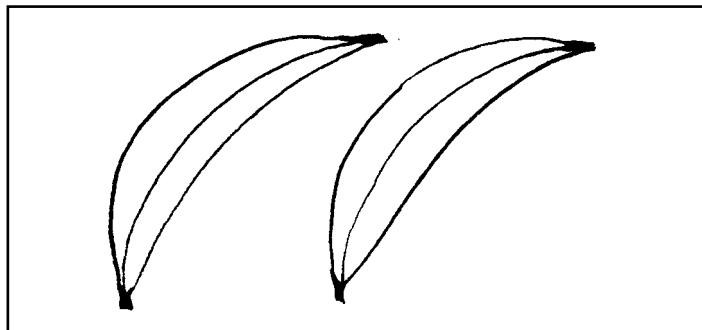


## Whole class activity

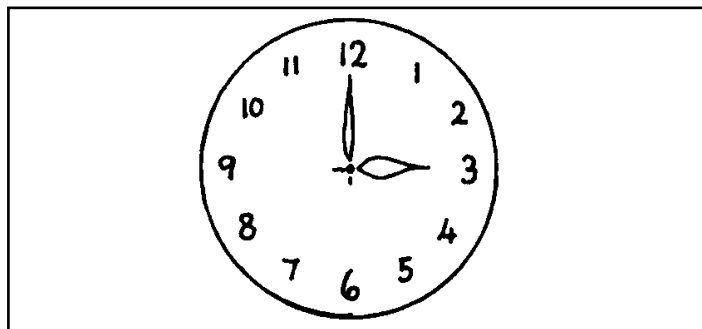
Ben has 3 pencils on his table and Rachel has 5 pencils on her table. How many pencils will they need to pack away altogether?



At the shop bananas cost 8p each. How much would it cost Lynn to buy 2 bananas?



Meredith got on the bus at 3 o'clock. She got off at 5 o'clock. How long did her journey last?

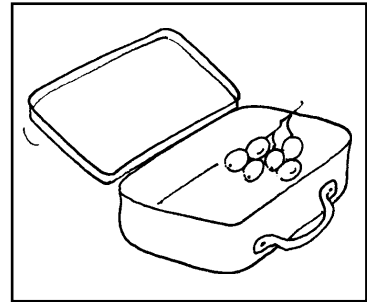


1. Kate has a bunch of 6 grapes in her lunchbox and eats 3 at break time. How many grapes does she have left for her lunch?

I will need to \_\_\_\_\_

To help me I will use \_\_\_\_\_

The answer is \_\_\_\_\_

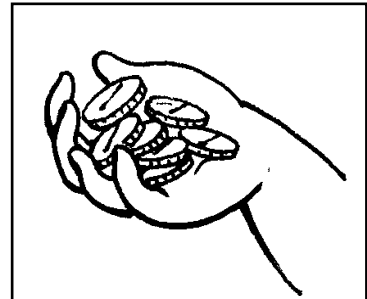


2. Kala's mum gives her £3 to go swimming. It costs £2 to get in the swimming pool. How much money will she have left?

I will need to \_\_\_\_\_

To help me I will use \_\_\_\_\_

The answer is \_\_\_\_\_

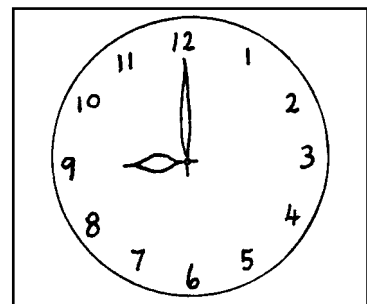


3. George starts school at 9 o'clock. His dad starts work 1 hour earlier. What time does his dad start work?

I will need to \_\_\_\_\_

To help me I will use \_\_\_\_\_

The answer is \_\_\_\_\_




4. To make her chocolate cake Haley needs 2 cups of flour. How many cups will she need if she makes 2 cakes?

I will need to \_\_\_\_\_

To help me I will use \_\_\_\_\_

The answer is \_\_\_\_\_

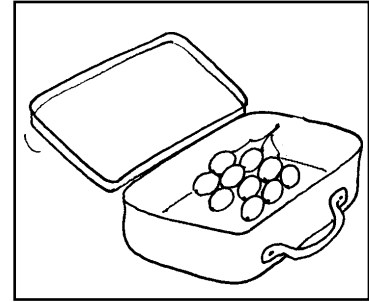


1. Kate has a bunch of 10 grapes in her lunchbox and eats 6 at break time. How many grapes does she have left for her lunch?

I will need to \_\_\_\_\_

To help me I will use \_\_\_\_\_

The answer is \_\_\_\_\_

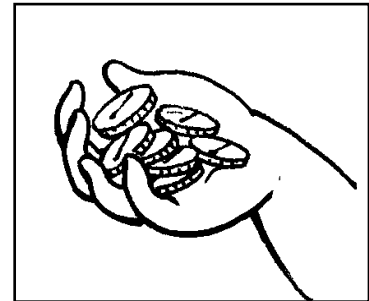


2. Kala's mum gives her £5 to go swimming. It costs £2 to get in the swimming pool. How much money will she have left?

I will need to \_\_\_\_\_

To help me I will use \_\_\_\_\_

The answer is \_\_\_\_\_




3. George starts school at 9 o'clock. His dad starts work 2 hours earlier. What time does his dad start work?

I will need to \_\_\_\_\_

To help me I will use \_\_\_\_\_

The answer is \_\_\_\_\_




4. To make her chocolate cake Haley needs 4 cups of flour. How many cups will she need if she makes 2 cakes?

I will need to \_\_\_\_\_

To help me I will use \_\_\_\_\_

The answer is \_\_\_\_\_

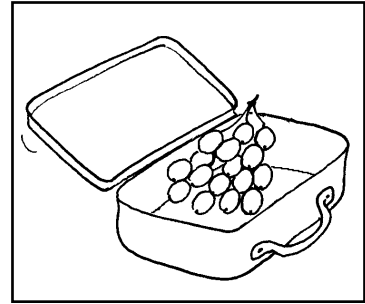


1. Kate has a bunch of 15 grapes in her lunchbox and eats 8 at break time. How many grapes does she have left for her lunch?

I will need to \_\_\_\_\_

To help me I will use \_\_\_\_\_

The answer is \_\_\_\_\_

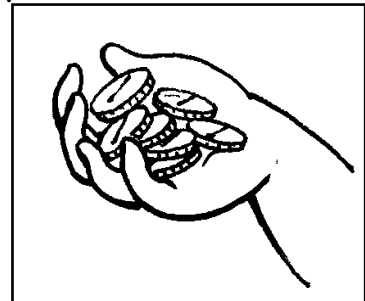


2. Kala's mum gives her £10 to go swimming. It costs £4 pounds to get in the swimming pool. How much money will she have left?

I will need to \_\_\_\_\_

To help me I will use \_\_\_\_\_

The answer is \_\_\_\_\_

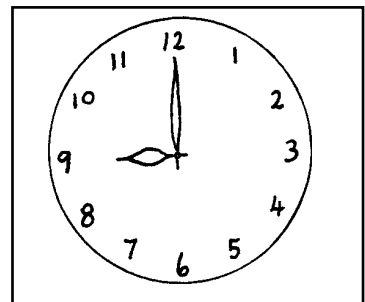


3. George starts school at 9 o'clock. His dad starts work 4 hours earlier. What time does his dad start work?

I will need to \_\_\_\_\_

To help me I will use \_\_\_\_\_

The answer is \_\_\_\_\_



4. To make her chocolate cake Haley needs 6 cups of flour. How many cups will she need if she makes 2 cakes?

I will need to \_\_\_\_\_

To help me I will use \_\_\_\_\_

The answer is \_\_\_\_\_

