



## Whole class activity


Adam has 31 cars in his car collection. His friend Craig has 11 fewer than him. How many does Craig have?



The school bus is taking 27 children to school. 8 more children get on at the last stop. How many children arrive at school on the bus?



Anne has 14 pence. Sara has 15 pence. How much do they have all together?




1. Joshua has 18p and buys a book for 11p. How much change will he have?

I will need to \_\_\_\_\_

To help me I will use \_\_\_\_\_

The answer is \_\_\_\_\_




2. At lunch time Jayani wants 5 chips with her fish fingers and Jack wants 6. How many chips does Mum need to cook all together?

I will need to \_\_\_\_\_

To help me I will use \_\_\_\_\_

The answer is \_\_\_\_\_




3. Class 3 has borrowed 16 books from the library. Class 4 has borrowed 10. How many books will need to be returned all together?

I will need to \_\_\_\_\_

To help me I will use \_\_\_\_\_

The answer is \_\_\_\_\_

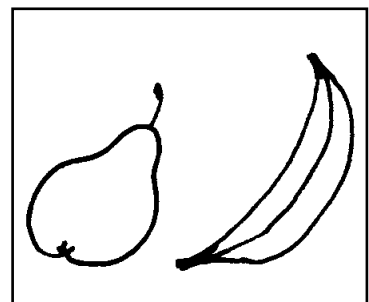


4. The pears they sell in the school canteen are 9 grams heavier than the bananas. If the banana weighs 43 grams, how much does the pear weigh?

I will need to \_\_\_\_\_

To help me I will use \_\_\_\_\_

The answer is \_\_\_\_\_




1. Joshua has 24p and buys a book for 11p. How much change will he have?

I will need to \_\_\_\_\_

To help me I will use \_\_\_\_\_

The answer is \_\_\_\_\_




2. At lunch time Jayani wants 8 chips with her fish fingers and Jack wants 9. How many chips does Mum need to cook all together?

I will need to \_\_\_\_\_

To help me I will use \_\_\_\_\_

The answer is \_\_\_\_\_




3. Class 3 has borrowed 26 books from the library. Class 4 has borrowed 10. How many books will need to be returned all together?

I will need to \_\_\_\_\_

To help me I will use \_\_\_\_\_

The answer is \_\_\_\_\_

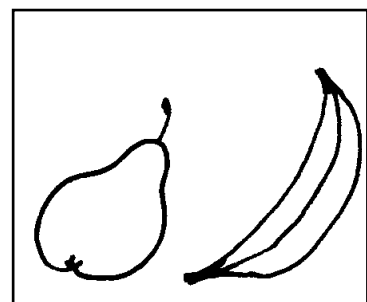


4. The pears they sell in the school canteen are 9 grams heavier than the bananas. If the banana weighs 68 grams, how much does the pear weigh?

I will need to \_\_\_\_\_

To help me I will use \_\_\_\_\_

The answer is \_\_\_\_\_




1. Joshua has 35p and buys a book for 11p. How much change will he have?

I will need to \_\_\_\_\_

To help me I will use \_\_\_\_\_

The answer is \_\_\_\_\_




2. At lunch time Jayani wants 13 chips with her fish fingers and Jack wants 12. How many chips does Mum need to cook all together?

I will need to \_\_\_\_\_

To help me I will use \_\_\_\_\_

The answer is \_\_\_\_\_




3. Class 3 has borrowed 26 books from the library. Class 4 has borrowed 20. How many books will need to be returned all together?

I will need to \_\_\_\_\_

To help me I will use \_\_\_\_\_

The answer is \_\_\_\_\_



4. The pears they sell in the school canteen are 19 grams heavier than the bananas. If the banana weighs 85 grams, how much does the pear weigh?

I will need to \_\_\_\_\_

To help me I will use \_\_\_\_\_

The answer is \_\_\_\_\_

